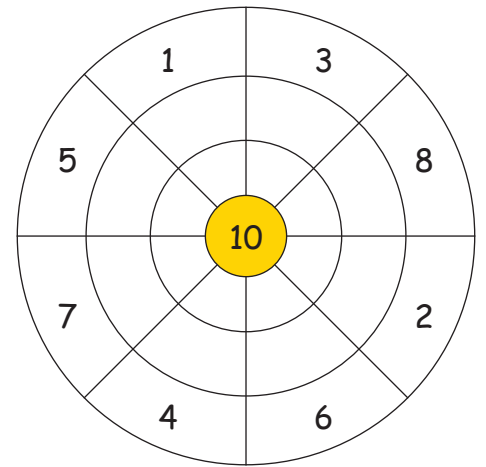
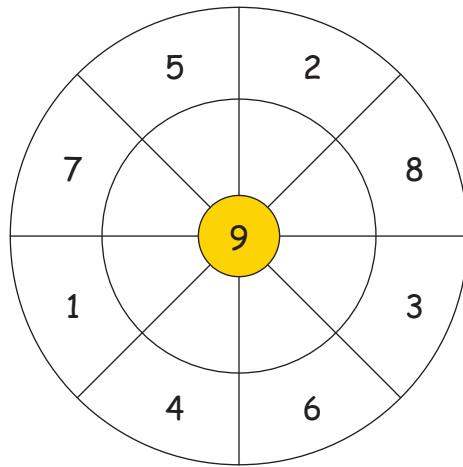
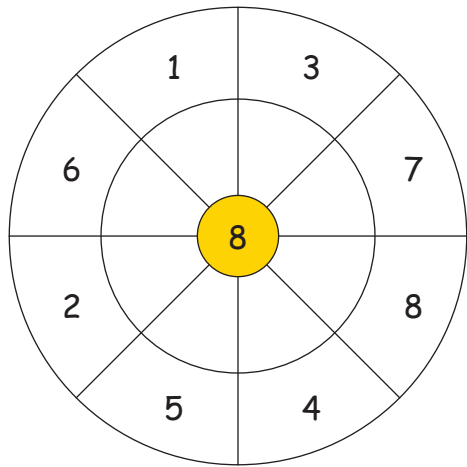


## Entdecken und Ergänzen


### 1. Rechenkreise:



### 2. Umkehraufgaben:

Rechne zuerst die Addition und dann die Subtraktion. Fällt dir etwas auf dabei?

4	+	6	=	
9	+	1	=	
2	+	8	=	
5	+	5	=	
3	+	7	=	
0	+	10	=	
8	+	2	=	
1	+	9	=	
6	+	4	=	
7	+	3	=	



10	-	6	=	
10	-	1	=	
10	-	8	=	
10	-	5	=	
10	-	7	=	
10	-	10	=	
10	-	2	=	
10	-	9	=	
10	-	4	=	
10	-	3	=	

### 3. Mehrere Rechenwege:

$2 + \underline{\quad}$   
 $3 + \underline{\quad}$   
 $5 + \underline{\quad}$



$9 + \underline{\quad}$   
 $1 + \underline{\quad}$

$1 + \underline{\quad}$   
 $4 + \underline{\quad}$   
 $2 + \underline{\quad}$



$6 + \underline{\quad}$   
 $0 + \underline{\quad}$