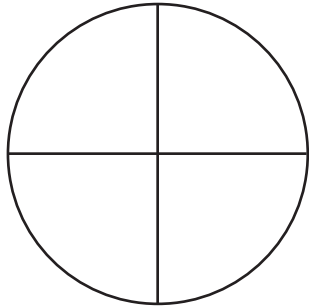
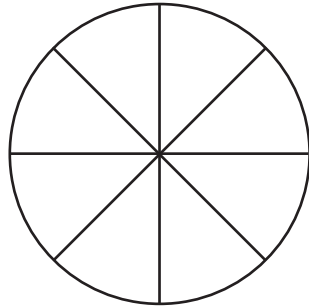


Erstes Rechnen mit Brüchen

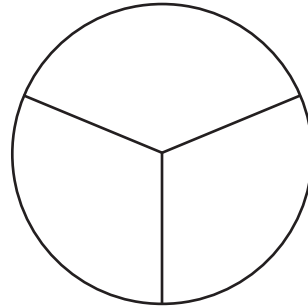
Bemale den angegebenen Bruchteil!



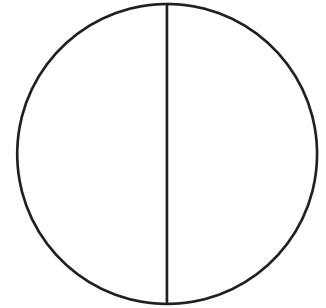
$3/4$



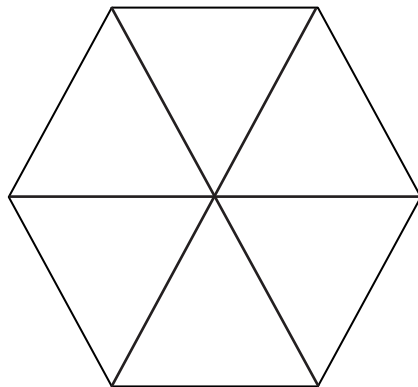
$6/8$



$2/3$



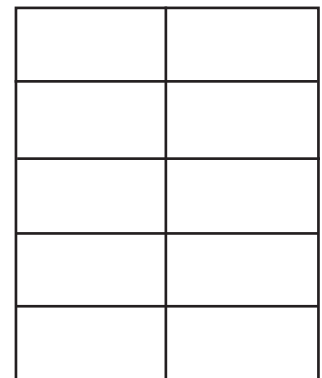
$1/2$



$1/6$



$4/5$



$2/10$

Male so an, dass die Rechnung stimmt!

$=$
 $4/2 = 2 \text{ Ganze}$

$=$
 $8/2 = 4 \text{ Ganze}$

$=$
 $3/3 = 1 \text{ Ganzes}$