


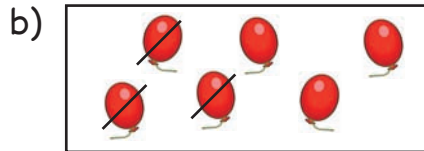
NIMM WEG



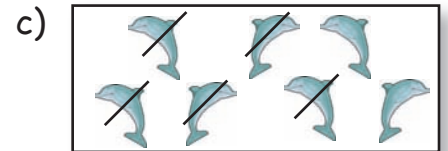
1. Rechne und setze die fehlenden Zahlen ein.



$$9 - 4 = \boxed{5}$$




$$6 - 3 = \square$$



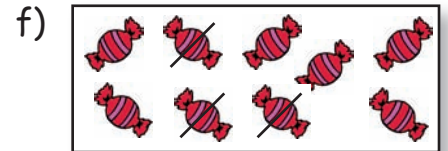
$$7 - 5 = \square$$




$$5 - \square = \square$$



$$7 - \square = \square$$




$$9 - \square = \square$$



$$8 - \square = \square$$



$$3 - \square = \square$$



$$4 - \square = \square$$

2. Ergänze jetzt die fehlenden Rechnungen.

