
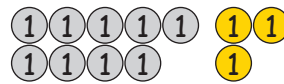


## Zehnerüberschreitungen

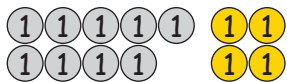
1. Rechne die Beispiele. Die Münzen helfen dir dabei.



$9 + 2 = \underline{\quad}$



$9 + 3 = \underline{\quad}$



$9 + 4 = \underline{\quad}$



$8 + 3 = \underline{\quad}$



$8 + 4 = \underline{\quad}$



$8 + 5 = \underline{\quad}$



$7 + 4 = \underline{\quad}$



$7 + 5 = \underline{\quad}$



$7 + 6 = \underline{\quad}$



$6 + 5 = \underline{\quad}$



$6 + 6 = \underline{\quad}$



$6 + 7 = \underline{\quad}$



$5 + 6 = \underline{\quad}$



$5 + 7 = \underline{\quad}$



$5 + 8 = \underline{\quad}$



$4 + 7 = \underline{\quad}$



$4 + 8 = \underline{\quad}$



$4 + 9 = \underline{\quad}$

