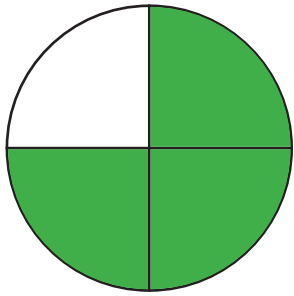
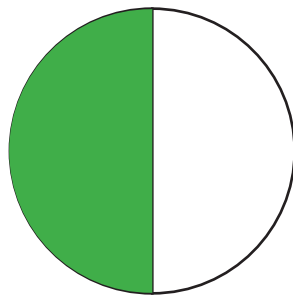


Déterminer et représenter les fractions

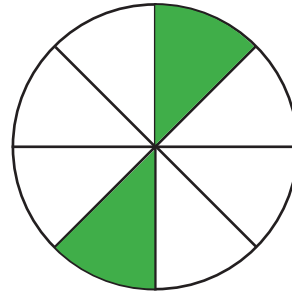
① Représenter les fractions - Dessine la partie indiquée



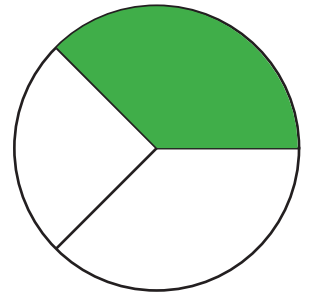
$$\frac{3}{4}$$




$$\frac{1}{2}$$



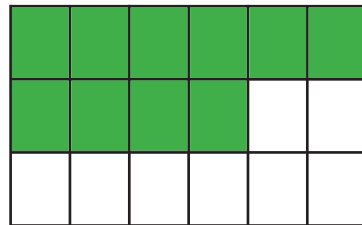
$$\frac{2}{8}$$



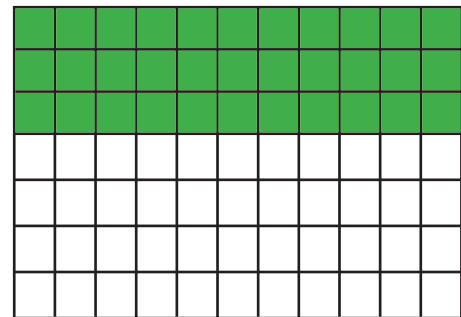
$$\frac{1}{3}$$



$$\frac{4}{5}$$

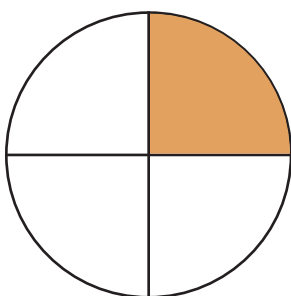


$$\frac{10}{18}$$

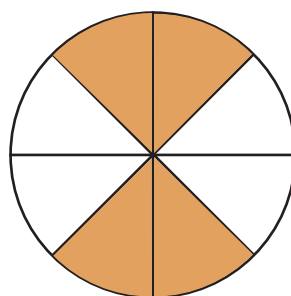


$$\frac{33}{77}$$

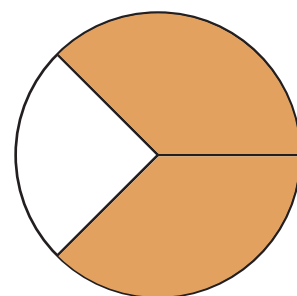
② Déterminer les fractions - Inscris la fraction correspondante !



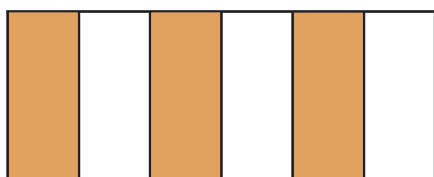
$$\frac{1}{4}$$



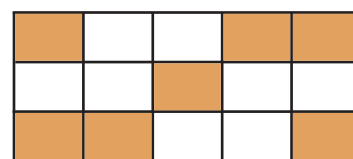
$$\frac{4}{8}$$



$$\frac{2}{3}$$



$$\frac{3}{6}$$



$$\frac{7}{15}$$