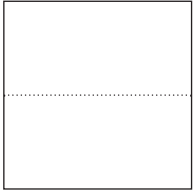


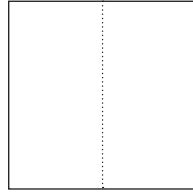
Les surfaces

1. Découpe un carré de 5 cm de côté. Plie-le selon les schémas ci-dessous !

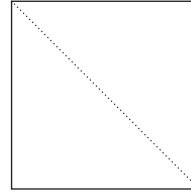
Qu'en résulte-t-il ?



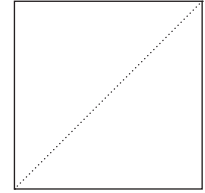
Rectangle



Carré




Triangle



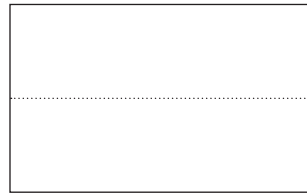
Triangle

2. Découpe un rectangle L = 4 cm, l = 2,5 cm. Plie-le selon les schéma ci-dessous !

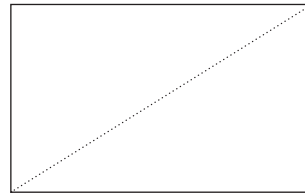
Quelles nouvelles figurent en résulte-t-il ?



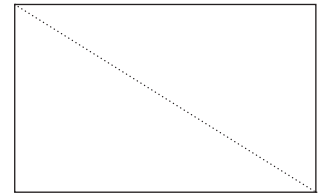
Carré



Rectangle




Triangle



Triangle

3. Ce petit cube est carré de quadrillage :


Combien de ces cubes trouvent-on dans ces carrés ?




25



4



16




9

Combien de cubes trouvent-on dans ces rectangles ?




10



12

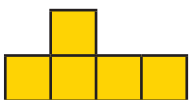


8




6


Combien de cubes trouvent-on dans ces différentes figures ?




5



4



5



8