



Les symétries

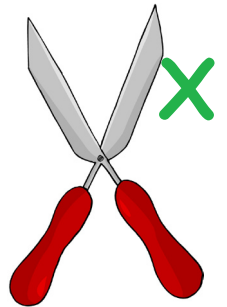
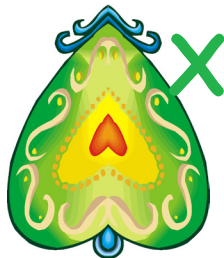
1. Quel résultat ?

Que deviennent ces différents pliages ?

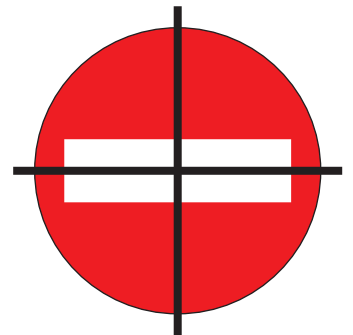
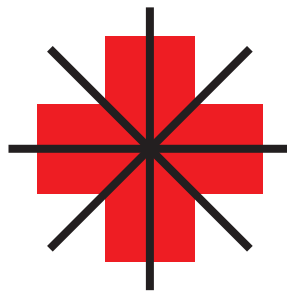


2. Figures symétriques :

a.) Parmi les figures ci-dessous, lesquelles sont symétriques ?



b.) Dessine l'axe de symétrie.



c.) Colorie la partie blanche dans les mêmes couleurs.

