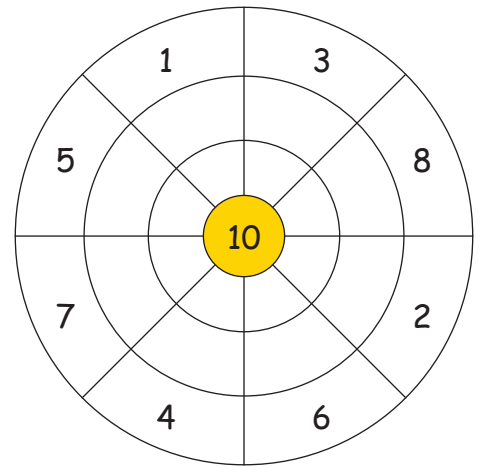
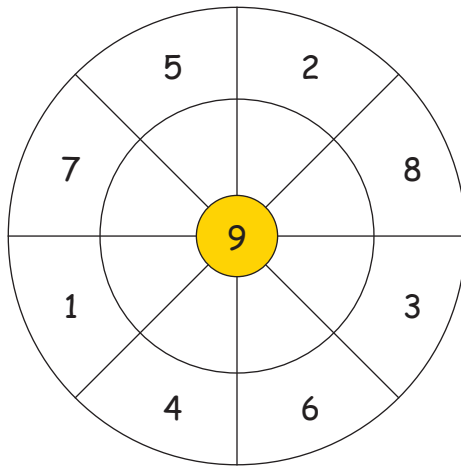
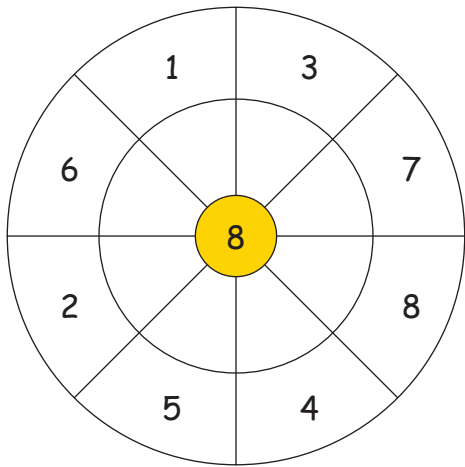


Découvrir et compléter


1. Cercle de calcul :



2. Inversion :

Calcule d'abord les additions et ensuite les soustractions. Que remarques-tu ?

4	+	6	=	
9	+	1	=	
2	+	8	=	
5	+	5	=	
3	+	7	=	
0	+	10	=	
8	+	2	=	
1	+	9	=	
6	+	4	=	
7	+	3	=	



10	-	6	=	
10	-	1	=	
10	-	8	=	
10	-	5	=	
10	-	7	=	
10	-	10	=	
10	-	2	=	
10	-	9	=	
10	-	4	=	
10	-	3	=	

3. Plusieurs opérations pour un même résultat :

$2 + \underline{\quad}$
 $3 + \underline{\quad}$
 $5 + \underline{\quad}$



$9 + \underline{\quad}$
 $1 + \underline{\quad}$

$1 + \underline{\quad}$
 $4 + \underline{\quad}$
 $2 + \underline{\quad}$



$6 + \underline{\quad}$
 $0 + \underline{\quad}$