


Les chiffres jusqu'à 201. Entoure les chiffres pairs :


1	2	3	4	5	6	7	8	9	10
11	12	13	14	15	16	17	18	19	20

2. Inscris les chiffres manquants :3. Toujours un peu plus riche :


Chaque jour David mets un Euro dans son porte-monnaie.



$10 + 1 = \square$



$10 + 2 = \square$



$10 + 3 = \square$




$10 + 4 = \square$




$10 + 5 = \square$



$10 + 6 = \square$




$10 + 7 = \square$



$10 + 8 = \square$



$10 + 9 = \square$



$10 + 10 = \square$

4. Entoure les chiffres impairs :

1	2	3	4	5	6	7	8	9	10
11	12	13	14	15	16	17	18	19	20