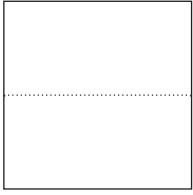

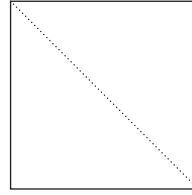


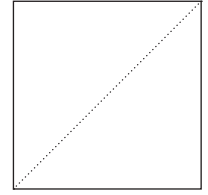
Les surfaces**1. Découpe un carré de 5 cm de côté. Plie-le selon les schémas ci-dessous !**

Qu'en résulte-t-il ?






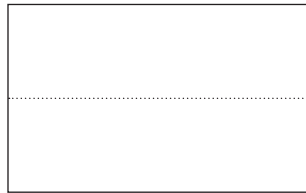


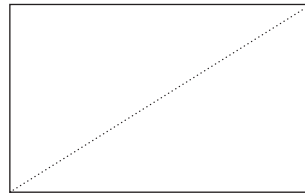


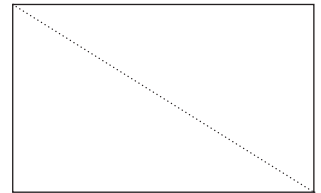
2. Découpe un rectangle L = 4 cm, l = 2,5 cm. Plie-le selon les schéma ci-dessous !

Quelles nouvelles figures en résulte-t-il ?












3. Ce petit cube est carré de quadrillage :

Combien de ces cubes trouvent-on dans ces carrés ?











Combien de cubes trouvent-on dans ces rectangles ?









Combien de cubes trouvent-on dans ces différentes figures ?



